



Cambridge International Examinations
Cambridge International General Certificate of Secondary Education

CANDIDATE
NAME

CENTRE
NUMBER

| | | | | |
|--|--|--|--|--|
| | | | | |
|--|--|--|--|--|

CANDIDATE
NUMBER

| | | | |
|--|--|--|--|
| | | | |
|--|--|--|--|

CHEMISTRY

0620/41

Paper 4 Theory (Extended)

October/November 2017

1 hour 15 minutes

Candidates answer on the Question Paper.

No Additional Materials are required.

READ THESE INSTRUCTIONS FIRST

Write your Centre number, candidate number and name on all the work you hand in.

Write in dark blue or black pen.

You may use an HB pencil for any diagrams or graphs.

Do not use staples, paper clips, glue or correction fluid.

DO NOT WRITE IN ANY BARCODES.

Answer **all** questions.

Electronic calculators may be used.

A copy of the Periodic Table is printed on page 16.

You may lose marks if you do not show your working or if you do not use appropriate units.

At the end of the examination, fasten all your work securely together.

The number of marks is given in brackets [] at the end of each question or part question.

The syllabus is approved for use in England, Wales and Northern Ireland as a Cambridge International Level 1/Level 2 Certificate.

This document consists of **16** printed pages.



2

1 The table gives information about five particles. The particles are all atoms or ions.

| particle | number of protons | number of neutrons | number of electrons |
|----------|-------------------|--------------------|---------------------|
| A | 6 | 8 | 6 |
| B | 12 | 12 | 12 |
| C | 13 | 14 | 10 |
| D | 8 | 8 | 10 |
| E | 11 | 12 | 11 |

Answer the following questions using the information in the table.
Each particle may be used once, more than once or not at all.

(a) Which particle, **A**, **B**, **C**, **D** or **E**,

(i) is an atom with atomic number 12,

..... [1]

(ii) is an atom with nucleon number 14,

..... [1]

(iii) is an ion with a positive charge,

..... [1]

(iv) has only **one** electron in its outer shell?

..... [1]

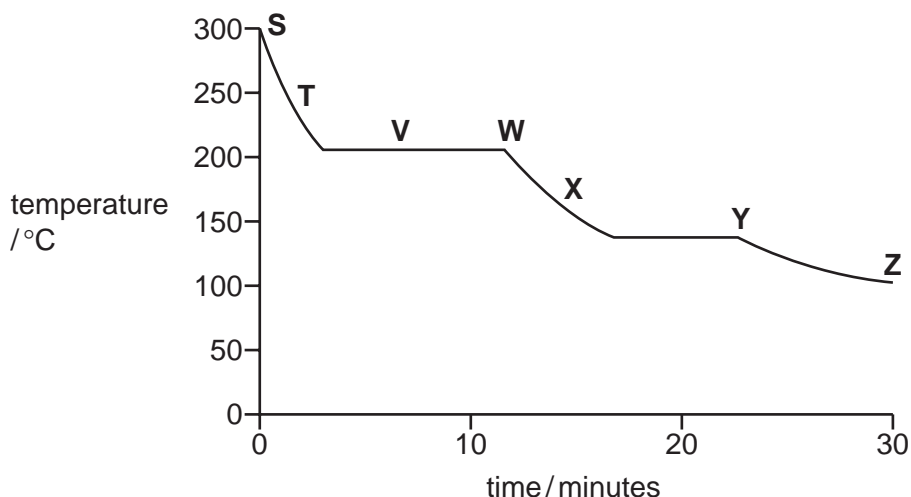
(b) **D** is an ion of an element.

Identify the element and write the formula of **D**.

..... [2]

[Total: 6]

2 The graph shows how the temperature of a substance changes as it is cooled over a period of 30 minutes. The substance is a gas at the start.



Each letter on the graph may be used once, more than once or not at all.

(a) Which letter, **S, T, V, W, X, Y** or **Z**, shows when

(i) the particles in the substance have the most kinetic energy,

..... [1]

(ii) the particles in the substance are furthest apart,

..... [1]

(iii) the substance exists as both a gas and a liquid?

..... [1]

(b) Use the graph to estimate the freezing point of the substance.

..... °C [1]

(c) Name the change of state directly from a solid to a gas.

..... [1]

(d) When smoke is viewed through a microscope, the smoke particles in the air appear to jump around.

(i) What term describes this movement of the smoke particles?

..... [1]


(ii) Explain why the smoke particles move in this way.

.....

 [2]

[Total: 8]

- 3 (a) When magnesium is added to aqueous copper(II) sulfate a reaction occurs. The ionic equation for the reaction is shown.



- (i) Give **one** change you would observe during this reaction.

..... [1]

- (ii) Explain why this is a redox reaction.

.....
 [1]

- (iii) Identify the oxidising agent in this reaction. Give a reason for your answer.

.....
 [2]

- (iv) A redox reaction occurs when magnesium is heated with iron(III) oxide.

Write a chemical equation for the reaction between magnesium and iron(III) oxide.

..... [2]

- (b) The metal iron and the alloy steel are commonly used materials. A problem with them is that they rust.

- (i) How does painting iron and steel prevent rusting?

.....
 [1]

- (ii) Magnesium blocks can be attached to the bottom of steel boats.

Explain how the magnesium blocks prevent the whole of the bottom of the boat from rusting.

.....

 [2]

5

(iii) Replacing the magnesium blocks with copper blocks does not prevent rusting.

Explain why the copper blocks do **not** prevent rusting.


.....

..... [1]

[Total: 10]

4 (a) Ethanol, C₂H₅OH, can be made by fermentation.

(i) Complete the chemical equation for the formation of ethanol by fermentation.



(ii) State **two** conditions required for fermentation.

- 1
- 2
- [2]

(b) Ethanol can also be made by the catalytic hydration of ethene. The equation for the reaction is shown.



(i) Name a suitable catalyst for this reaction.

..... [1]

(ii) Calculate the maximum mass of ethanol that can be made from 56 g of ethene.

maximum mass of ethanol = g [2]

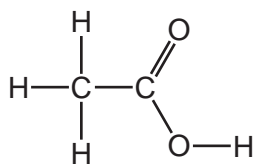
(c) Ethanol can be oxidised to form ethanoic acid.

(i) Name a suitable oxidising agent for this reaction.

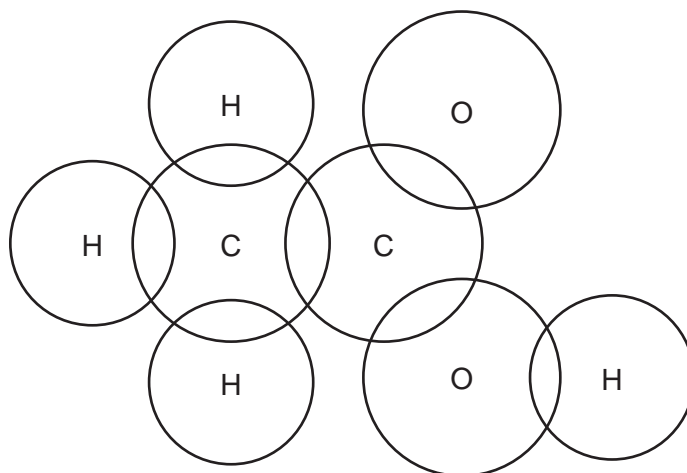
..... [1]

7

(ii) A molecule of ethanoic acid has the structure shown.



Complete the dot-and-cross diagram to show the electron arrangement in ethanoic acid. Show outer shell electrons only.



[3]

(d) Ethanoic acid is a weak acid.

(i) When referring to an acid, what is meant by the term *weak*?

.....
 [1]

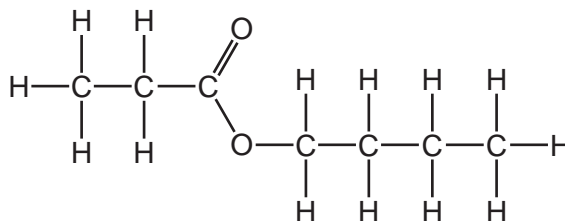
(ii) Describe how you could show that ethanoic acid is a weaker acid than hydrochloric acid.

.....

 [3]

(e) Carboxylic acids react with alcohols to make esters.

The structure of an ester is shown.



Draw the structures of the carboxylic acid and alcohol from which this ester can be made.
Give the names of the carboxylic acid and alcohol.

structure of the carboxylic acid

name of the carboxylic acid

structure of the alcohol

name of the alcohol

[4]

[Total: 19]

5 (a) Solid copper(II) carbonate undergoes thermal decomposition. One of the products of the thermal decomposition is copper(II) oxide.

(i) State the colour change of the solid seen during the reaction.

start colour

end colour

[1]

(ii) Write a chemical equation for the thermal decomposition of copper(II) carbonate.

..... [1]

(b) Copper(II) carbonate reacts with dilute nitric acid. One of the products of the reaction is a solution of copper(II) nitrate.

(i) Describe tests for copper(II) ions and nitrate ions. Include the results of the tests.

copper(II) ions

.....

.....

nitrate ions

.....

.....

[4]

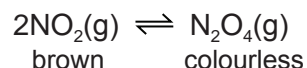
(ii) Copper(II) nitrate undergoes thermal decomposition.

Balance the chemical equation for the thermal decomposition of copper(II) nitrate.

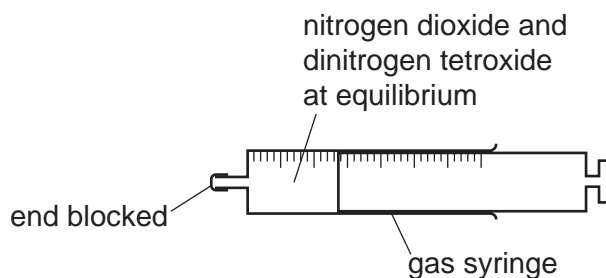


[1]

- (c) Nitrogen dioxide, NO_2 , exists in equilibrium with dinitrogen tetroxide, N_2O_4 . Nitrogen dioxide is brown and dinitrogen tetroxide is colourless.



- (i) A sample of nitrogen dioxide and dinitrogen tetroxide at equilibrium was placed in a closed gas syringe. The syringe plunger was pushed in. This increased the pressure in the gas syringe. The temperature was kept constant.



State how the colour of the gas in the syringe changed. Explain your answer in terms of the position of the equilibrium.

.....

.....

.....

..... [3]

- (ii) A sealed tube containing nitrogen dioxide and dinitrogen tetroxide at equilibrium was cooled in an ice bath at constant pressure. The contents of the tube became paler.

Suggest an explanation for this observation in terms of the position of the equilibrium.

.....

.....

..... [2]

[Total: 12]

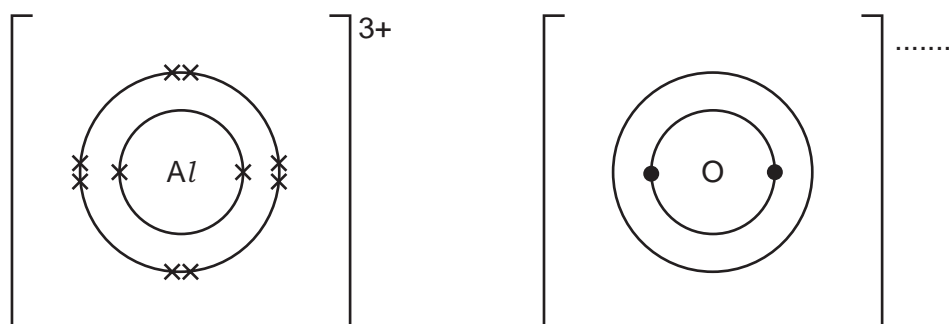
6 Aluminium is extracted from aluminium oxide by electrolysis.

(a) Why is aluminium **not** extracted by heating aluminium oxide with carbon?

.....
 [1]

(b) Aluminium oxide is an ionic compound with a high melting point.

(i) Complete the dot-and-cross diagram to show the electron arrangement in **one** of the oxide ions present in aluminium oxide. Include the charge on the oxide ion. One of the aluminium ions is shown.



[2]

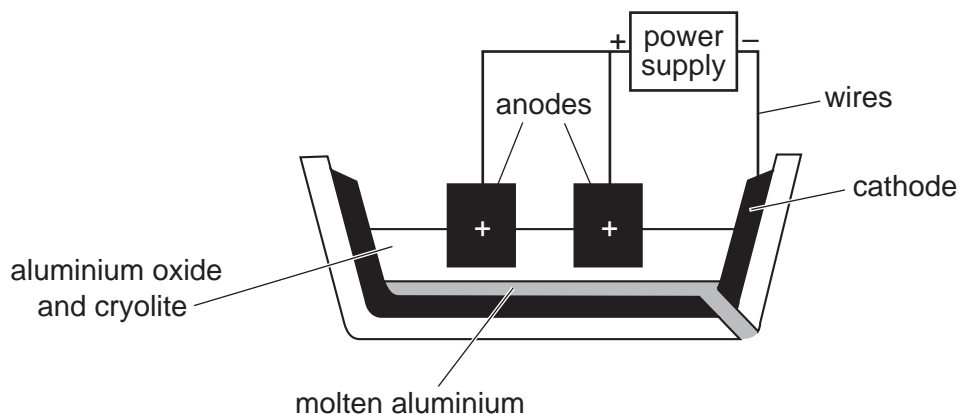
(ii) The melting point of aluminium oxide is above 2000 °C.

Explain why aluminium oxide has a high melting point.

.....

 [2]

(c) Aluminium can be extracted by electrolysis using the apparatus shown.



(i) Name the type of particle responsible for the transfer of charge in
 the wires,
 the electrolyte. [2]

(ii) Give **two** reasons why cryolite is used.
 1
 2 [2]

(iii) Write the ionic half-equation for the formation of aluminium during the electrolysis.
 [1]

(iv) Explain how carbon dioxide gas is formed at the anodes.

 [3]

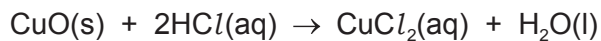
(d) When a piece of aluminium is placed in dilute hydrochloric acid, there is no immediate visible reaction.
 If the aluminium is left in the dilute hydrochloric acid for several hours, bubbles start to form.
 Explain why aluminium does **not** react immediately with dilute hydrochloric acid.

 [1]

[Total: 14]

Question 7 starts on the next page.

7 Copper(II) oxide reacts with dilute hydrochloric acid.



6.00 g of copper(II) oxide were added to 50.0 cm³ of 1.00 mol/dm³ hydrochloric acid. This was an excess of copper(II) oxide.

(a) The rate of the reaction can be increased by increasing the concentration of the hydrochloric acid or by heating it.

(i) In terms of collisions, explain why increasing the concentration of the hydrochloric acid increases the rate of the reaction.

.....

.....

.....

..... [2]

(ii) In terms of collisions, explain why heating the hydrochloric acid increases the rate of the reaction.

.....

.....

.....

..... [2]

(b) (i) Calculate the number of moles of copper(II) oxide added to the hydrochloric acid.

moles of copper(II) oxide = mol [2]

(ii) Calculate the number of moles of hydrochloric acid used.

moles of hydrochloric acid = mol [1]

(iii) Calculate the mass of copper(II) oxide that did **not** react.

mass of copper(II) oxide that did **not** react = g [2]

(c) Crystals of hydrated copper(II) chloride were obtained from the solution at the end of the reaction.

The crystals had the following composition by mass: Cl, 41.52%; Cu, 37.43%; H, 2.34%; O, 18.71%.

Calculate the empirical formula of the crystals.

empirical formula = [2]

[Total: 11]

Permission to reproduce items where third-party owned material protected by copyright is included has been sought and cleared where possible. Every reasonable effort has been made by the publisher (UCLES) to trace copyright holders, but if any items requiring clearance have unwittingly been included, the publisher will be pleased to make amends at the earliest possible opportunity.

To avoid the issue of disclosure of answer-related information to candidates, all copyright acknowledgements are reproduced online in the Cambridge International Examinations Copyright Acknowledgements Booklet. This is produced for each series of examinations and is freely available to download at www.cie.org.uk after the live examination series.

Cambridge International Examinations is part of the Cambridge Assessment Group. Cambridge Assessment is the brand name of University of Cambridge Local Examinations Syndicate (UCLES), which is itself a department of the University of Cambridge.

The Periodic Table of Elements

| | | Group | | | | | | | |
|--|-----------------------|-----------------------|--------------------------|------------------------|------------------------|------------------------|------------------------|------------------------|-------------------------|
| I | II | III | IV | V | VI | VII | VIII | | |
| 1 | 2 | 3 | 4 | 5 | 6 | 7 | 8 | 9 | 10 |
| H hydrogen 1 | He helium 4 | B boron 11 | C carbon 12 | N nitrogen 14 | O oxygen 16 | F fluorine 19 | Ne neon 20 | | |
| Key | | | | | | | | | |
| atomic number atomic symbol name relative atomic mass | | | | | | | | | |
| 3 | 4 | 5 | 6 | 7 | 8 | 9 | 10 | 11 | 12 |
| Li lithium 7 | Be beryllium 9 | B boron 11 | C carbon 12 | N nitrogen 14 | O oxygen 16 | F fluorine 19 | Ne neon 20 | Na sodium 23 | Mg magnesium 24 |
| 11 | 12 | 13 | 14 | 15 | 16 | 17 | 18 | 19 | 20 |
| Na sodium 23 | Mg magnesium 24 | Al aluminium 27 | Si silicon 28 | P phosphorus 31 | S sulfur 32 | Cl chlorine 35.5 | Ar argon 40 | K potassium 39 | Ca calcium 40 |
| 19 | 20 | 21 | 22 | 23 | 24 | 25 | 26 | 27 | 28 |
| K potassium 39 | Ca calcium 40 | Sc scandium 45 | Ti titanium 48 | V vanadium 51 | Cr chromium 52 | Mn manganese 55 | Fe iron 56 | Co cobalt 59 | Ni nickel 59 |
| 37 | 38 | 39 | 40 | 41 | 42 | 43 | 44 | 45 | 46 |
| Rb rubidium 85 | Sr strontium 88 | Y yttrium 89 | Zr zirconium 91 | Nb niobium 93 | Mo molybdenum 96 | Tc technetium — | Ru ruthenium 101 | Rh rhodium 103 | Pd palladium 106 |
| 55 | 56 | 57–71 | 72 | 73 | 74 | 75 | 76 | 77 | 78 |
| Cs caesium 133 | Ba barium 137 | lanthanoids | Hf hafnium 178 | Ta tantalum 181 | W tungsten 184 | Re rhenium 186 | Os osmium 190 | Ir iridium 192 | Pt platinum 195 |
| 87 | 88 | 89–103 | 104 | 105 | 106 | 107 | 108 | 109 | 110 |
| Fr francium — | Ra radium — | actinoids | Rf rutherfordium — | Db dubnium — | Sg seaborgium — | Bh bohrium — | Hs hassium — | Mt meitnerium — | Ds darmstadtium — |
| 81 | 82 | 83 | 84 | 85 | 86 | 87 | 88 | 89 | 90 |
| Tl thallium 204 | Pb lead 207 | Bi bismuth 209 | Po polonium — | At astatine — | Rn radon — | Fr francium — | Ra radium — | Ac actinium — | Th thorium 232 |
| 91 | 92 | 93 | 94 | 95 | 96 | 97 | 98 | 99 | 100 |
| Pa protactinium 231 | U uranium 238 | Np neptunium — | Pu plutonium — | Am americium — | Cm curium — | Bk berkelium — | Cf californium — | Es einsteinium — | Fm fermium — |
| 101 | 102 | 103 | 104 | 105 | 106 | 107 | 108 | 109 | 110 |
| Md mendelevium — | No nobelium — | Lr lawrencium — | Rf rutherfordium — | Db dubnium — | Sg seaborgium — | Bh bohrium — | Hs hassium — | Mt meitnerium — | Ds darmstadtium — |
| 109 | 110 | 111 | 112 | 113 | 114 | 115 | 116 | 117 | 118 |
| Cn copernicium — | Nh nihonium — | Fl flerovium — | Mc moscovium — | Lv livermorium — | Ts tennessine — | Og oganesson — | Uue unbinilium — | Uuh ununhexium — | Uuo ununoctium — |

lanthanoids

actinoids

| | | | | | | | | | | | | | | |
|------------------------|----------------------|---------------------------|------------------------|-----------------------|-----------------------|-----------------------|-------------------------|----------------------|-------------------------|------------------------|---------------------|------------------------|------------------------|-----------------------|
| 57 | 58 | 59 | 60 | 61 | 62 | 63 | 64 | 65 | 66 | 67 | 68 | 69 | 70 | 71 |
| La lanthanum 139 | Ce cerium 140 | Pr praseodymium 141 | Nd neodymium 144 | Pm promethium — | Sm samarium 150 | Eu europium 152 | Gd gadolinium 157 | Tb terbium 159 | Dy dysprosium 163 | Ho holmium 165 | Er erbium 167 | Tm thulium 169 | Yb ytterbium 173 | Lu lutetium 175 |
| 89 | 90 | 91 | 92 | 93 | 94 | 95 | 96 | 97 | 98 | 99 | 100 | 101 | 102 | 103 |
| Ac actinium — | Th thorium 232 | Pa protactinium 231 | U uranium 238 | Np neptunium — | Pu plutonium — | Am americium — | Cm curium — | Bk berkelium — | Cf californium — | Es einsteinium — | Fm fermium — | Md mendelevium — | No nobelium — | Lr lawrencium — |

The volume of one mole of any gas is 24 dm³ at room temperature and pressure (r.t.p.).